



YEAR 3

Friday 17th April

Homework Tasks (Year 3):


- **Maths:** Please complete and mark- the ‘Finding fractions of amounts’ tasks on the next pages of this document and record your responses in your homework jotter book.

*Please place your homework books in the homework box by **Wednesday 22nd April***

- **Spelling:** A spelling test, on **Summer Term 1 -Week 1 Red words** will take place next **Thursday** (see the separate spelling sheet for this term – it is split into weeks and you will be instructed which week we are currently learning).
- **Times Tables:** Please complete - and mark- Summer Term : Workout 1 p50 - 51 of your CGP 10-minute weekly workout book and your weekly test on the **3x , 4x and 5x** table will be next **Friday**.
- **Reading:** Please read for 45mins throughout the week.


Fractions of Amounts

Find $\frac{1}{2}$



Total: ladybirds
 $\frac{1}{2}$ of is

Find $\frac{1}{4}$




Total: cats
 $\frac{1}{4}$ of is

Find $\frac{1}{3}$




Total: cakes
 $\frac{1}{3}$ of is

Find $\frac{2}{4}$



Total: buttons
 $\frac{2}{4}$ of is

Find $\frac{3}{4}$




Total: pencils
 $\frac{3}{4}$ of is

Answers

Fractions of Amounts Answers

Find $\frac{1}{2}$



Total: **12** ladybirds

$\frac{1}{2}$ of **12** is **6**

Find $\frac{1}{4}$



Total: **16** cats

$\frac{1}{4}$ of **16** is **4**

Find $\frac{1}{3}$



Total: **6** cakes

$\frac{1}{3}$ of **6** is **2**

Find $\frac{2}{4}$



Total: **16** buttons

$\frac{2}{4}$ of **16** is **8**

Find $\frac{3}{4}$



Total: **20** pencils

$\frac{3}{4}$ of **20** is **15**